



Rewarding Learning

General Certificate of Secondary Education
2024

Centre Number

--	--	--	--	--

Candidate Number

--	--	--	--

Mathematics

Unit M8 Paper 1

(Non-Calculator)

Higher Tier



MV24

[GMC81]

MONDAY 3 JUNE, 9.15am–10.30am

Time

1 hour 15 minutes, plus your additional time allowance.

Instructions to Candidates

Write your Centre Number and Candidate Number in the spaces provided at the top of this page.

You must answer the questions in the spaces provided.

Do not write on blank pages or tracing paper.

Complete in black ink only.

Answer **all thirteen** questions.

All working should be clearly shown in the spaces provided. Marks may be awarded for partially correct solutions.

You **must not** use a calculator for this paper.

Information for Candidates

The total mark for this paper is 50.

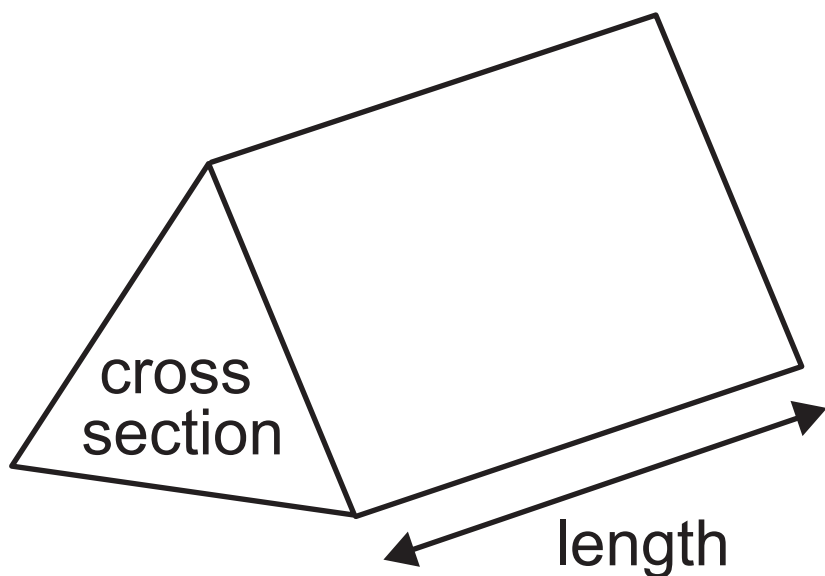
Figures in brackets printed at the end of each question indicate the marks awarded to each question or part question.

You should have a ruler, compasses and a protractor.

The Formula Sheet is on pages 3, 4 and 5.

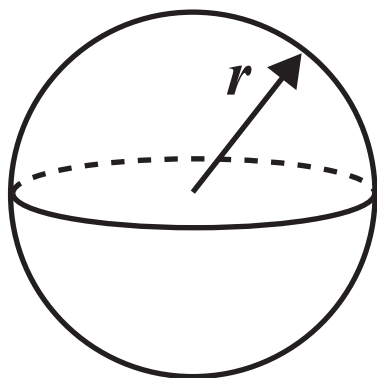
Formula Sheet

Volume of prism = area of cross section \times length



Volume of sphere = $\frac{4}{3} \pi r^3$

Surface area of sphere = $4 \pi r^2$



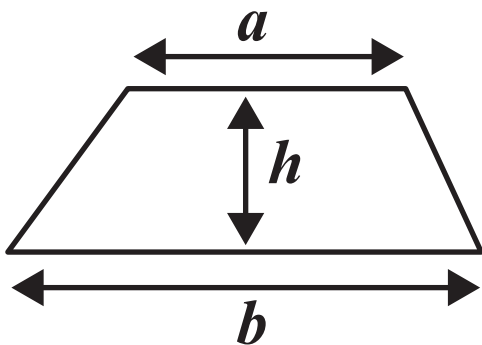
Quadratic Equation

The solutions of $ax^2 + bx + c = 0$

where $a \neq 0$, are given by

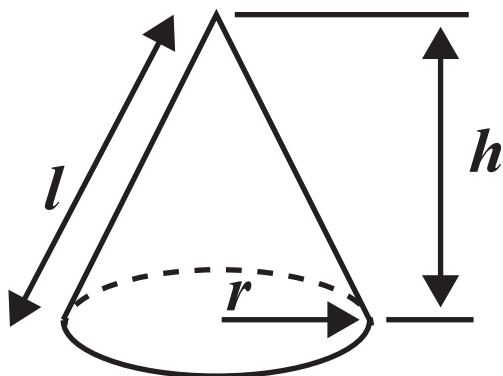
$$x = \frac{-b \pm \sqrt{b^2 - 4ac}}{2a}$$

Area of trapezium = $\frac{1}{2} (a + b)h$

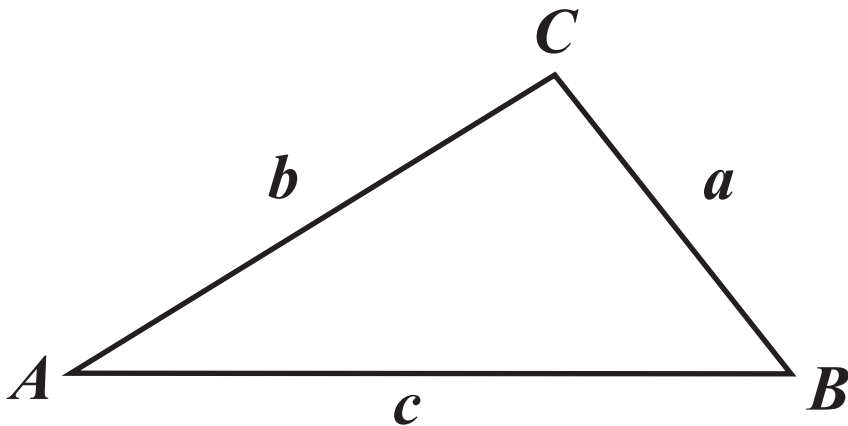


Volume of cone = $\frac{1}{3} \pi r^2 h$

Curved surface area of cone = $\pi r l$



In any triangle ABC



Sine Rule: $\frac{a}{\sin A} = \frac{b}{\sin B} = \frac{c}{\sin C}$

Cosine Rule: $a^2 = b^2 + c^2 - 2bc \cos A$

Area of triangle $= \frac{1}{2} ab \sin C$

1 John spends x hours each week on homework.

Joanne spends 3 hours more than John each week on homework.

In total they spend more time on homework each week than Sam, who spends 14 hours per week on homework.

Write down an inequality and solve it for x .
[3 marks]

Answer _____

2 Each interior angle of a regular polygon is 140°

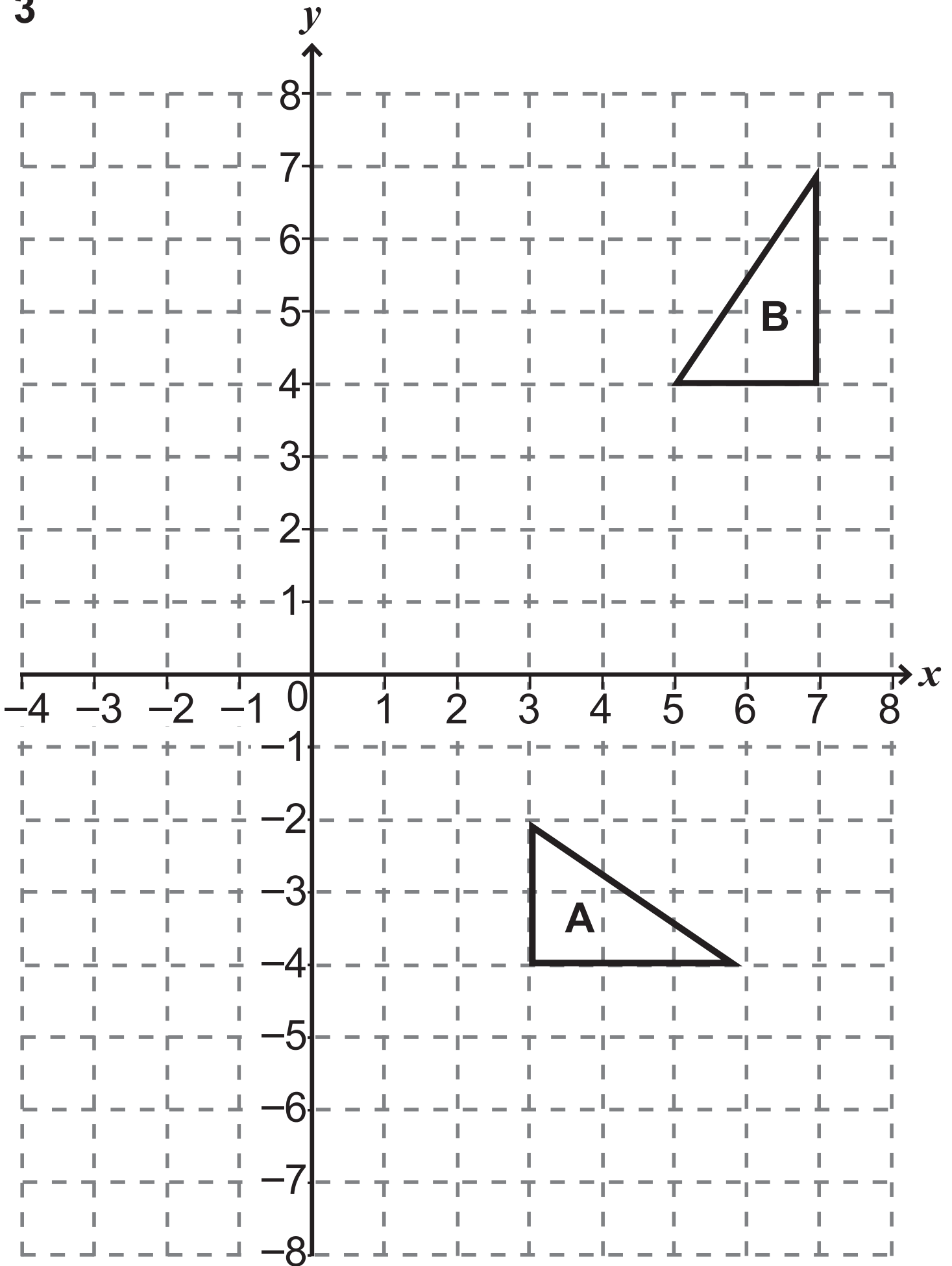
How many sides does it have? [2 marks]

Answer _____

Blank Page

(Questions continue overleaf)

3



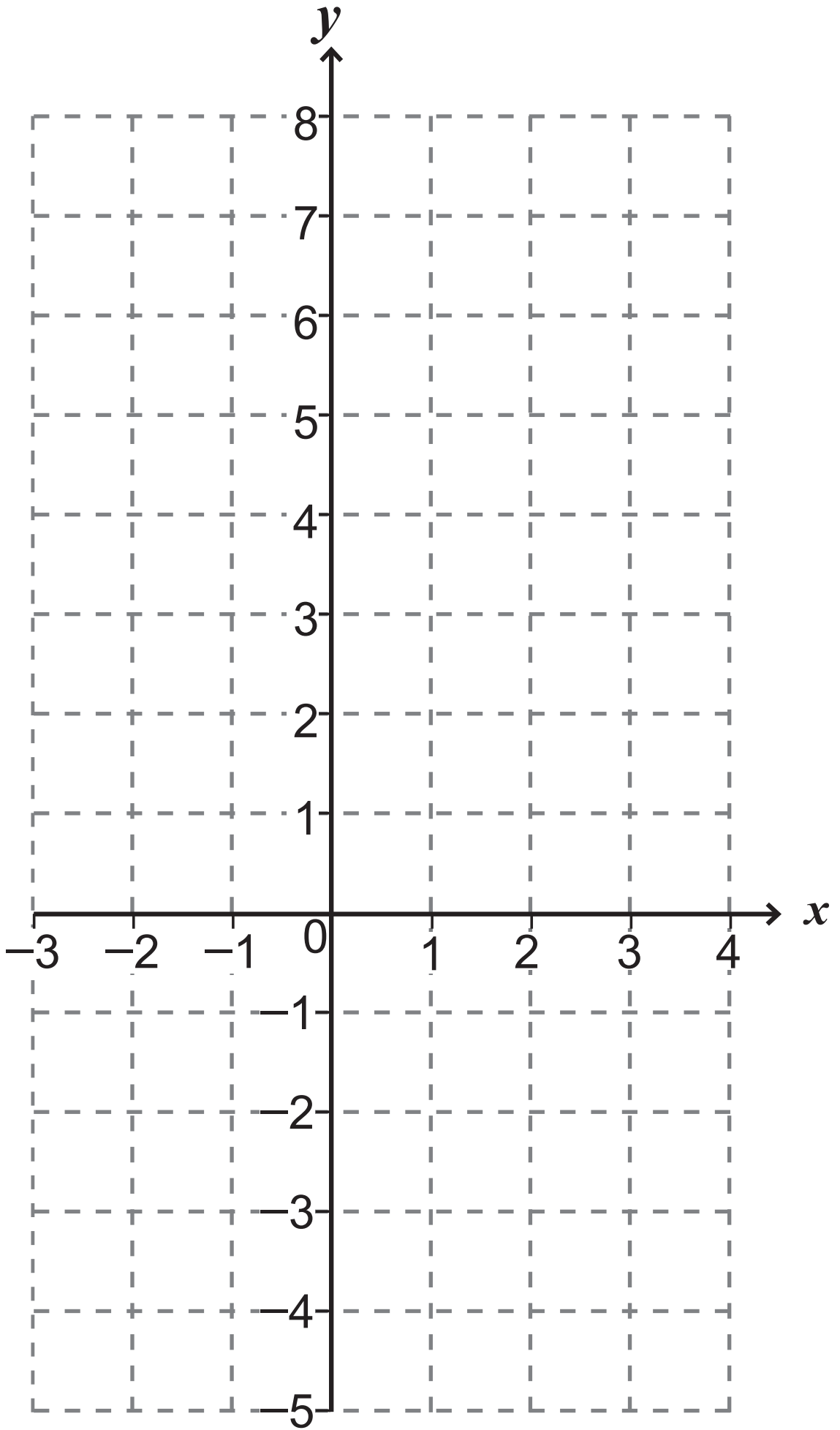
Describe fully the **single** transformation which takes triangle **A** to triangle **B**.
[3 marks]

Answer _____

- 4 (a) (i) Complete the table for $y = x^2 - x - 4$
[2 marks]

x	-3	-2	-1	0	1	2	3	4
y	8			-4	-4	-2	2	8

- (ii) Hence draw the graph of
 $y = x^2 - x - 4$ on the grid opposite.
[2 marks]



(b) Use the graph to solve the equation
 $x^2 - x - 4 = 0$ [1 mark]

Answer _____

(c) (i) Draw the line $y = 2x - 3$ on the grid. [1 mark]

(ii) Use your graph to find the points of intersection of $y = x^2 - x - 4$

and $y = 2x - 3$ [2 marks]

Answer (_____ , _____) , (_____ , _____)

(d) What line would you draw on the graph to solve the equation $x^2 + x - 9 = 0$?
[2 marks]

Answer _____

5 A jeweller sells watch batteries at a fixed price and watch straps at a different fixed price.

On Monday he sold 1 battery and 3 straps for **£40**

On Tuesday he sold 2 batteries and 1 strap for **£25**

Calculate the price of a battery and the price of a strap. [4 marks]

A solution by trial and error will not be accepted.

Answer Price of one battery £ _____

Price of one strap £ _____

6 A lunch deal consists of a sandwich, a drink and a piece of fruit.

On Friday there are 5 choices of sandwich, 6 choices of drink and 4 choices of fruit.

On Saturday there are 6 choices of sandwich, 8 choices of drink and 3 choices of fruit.

How many more combinations are available on Saturday than on Friday? [3 marks]

Answer _____

7 Which is heavier, **A** or **B**? [2 marks]

Show your working.

A $1.05 \times 10^7 \text{ g}$
--

B $1.5 \times 10^4 \text{ kg}$
--

Answer _____

8 A and B are similar shapes.

The area of A is 24 cm^2

The area of B is 96 cm^2

The height of B is 15 cm.

What is the height of A? [3 marks]

Answer _____ cm

Blank Page

(Questions continue overleaf)

9 A bag contains 2 yellow balls, 3 blue balls and 5 red balls.

Jill takes a ball at random out of the bag.

She **replaces** it.

She does this 3 times in total.

Work out the probability that the 3 balls are the same colour. [4 marks]

Answer _____

10 Simplify $(2x^2y^{-1})^4 \div 2y^3$ [3 marks]

Answer _____

11 A box contains three green pens and five red pens.

Alfie takes two pens from the box without replacement.

What is the probability that the pens are not the same colour? [4 marks]

Answer _____

12

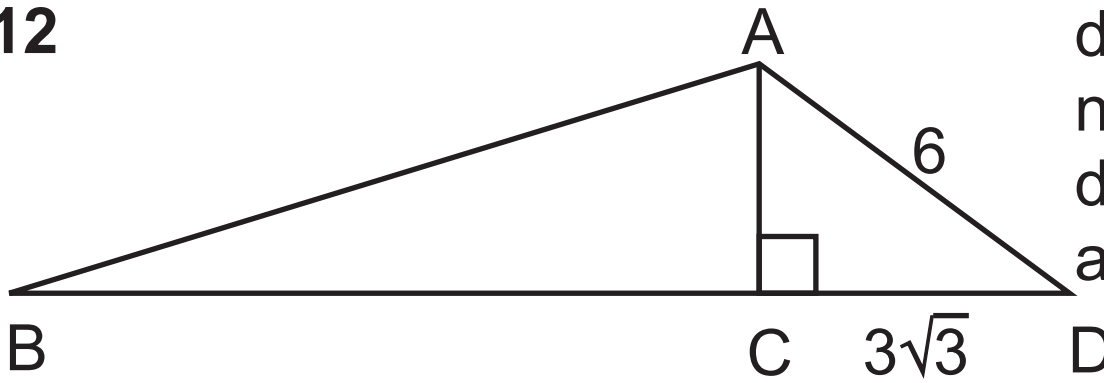


diagram
not
drawn
accurately

The area of **ABC** is $8\sqrt{3}$

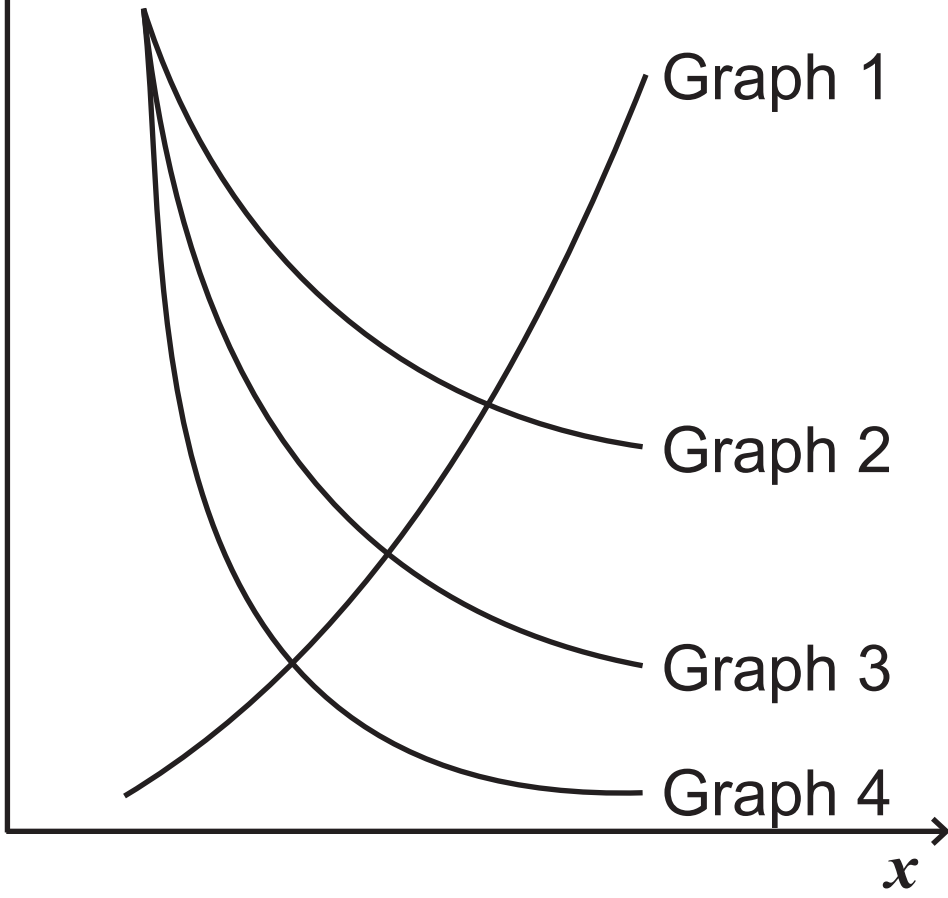
Show that the length of BD is $\frac{(25\sqrt{3})}{3}$
[6 marks]

Blank Page

(Questions continue overleaf)

13

y



Complete each sentence. [3 marks]

y is inversely proportional to x

describes Graph _____

y is inversely proportional to the square of x

describes Graph _____

y is inversely proportional to the square

root of x describes Graph _____

y is directly proportional to the square of x

describes Graph _____

**This is the end of the
question paper**

SOURCES

All images © CCEA unless stated

For Examiner's use only	
Question Number	Marks
1	
2	
3	
4	
5	
6	
7	
8	
9	
10	
11	
12	
13	
Total Marks	

Examiner Number

Permission to reproduce all copyright material has been applied for. In some cases, efforts to contact copyright holders may have been unsuccessful and CCEA will be happy to rectify any omissions of acknowledgement in future if notified.