



Centre Number

--	--	--	--	--

Candidate Number

--	--	--	--

General Certificate of Secondary Education
2024

Mathematics

Unit M7 Paper 1

(Non-Calculator)

Higher Tier



MV24

[GMC71]

MONDAY 3 JUNE, 9.15am–10.30am

Time

1 hour 15 minutes, plus your additional time allowance.

Instructions to Candidates

Write your Centre Number and Candidate Number in the spaces provided at the top of this page.

You must answer the questions in the spaces provided.

Do not write on blank pages or tracing paper.

Complete in black ink only.

Answer **all sixteen** questions.

All working should be clearly shown in the spaces provided. Marks may be awarded for partially correct solutions.

You **must not** use a calculator for this paper.

Information for Candidates

The total mark for this paper is 50.

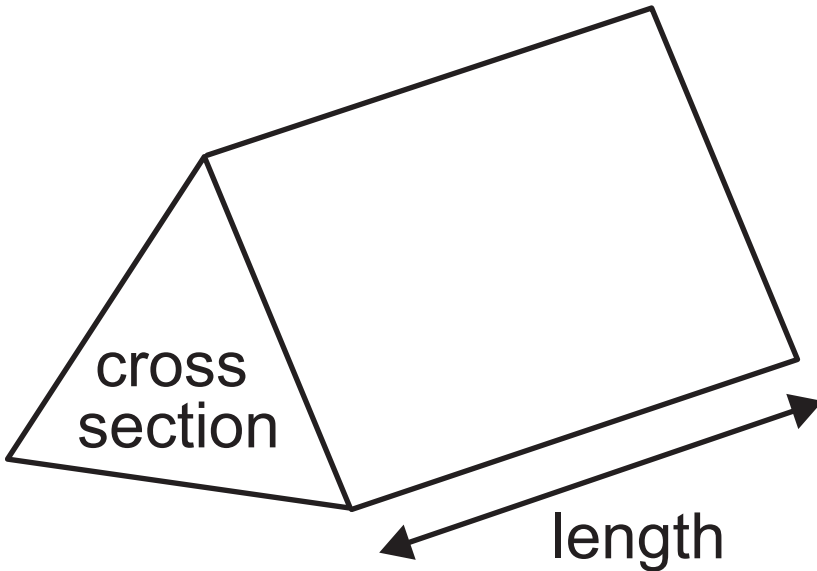
Figures in brackets printed at the end of each question indicate the marks awarded to each question or part question.

You should have a ruler, compasses and a protractor.

The Formula Sheet is on pages 3, 4 and 5.

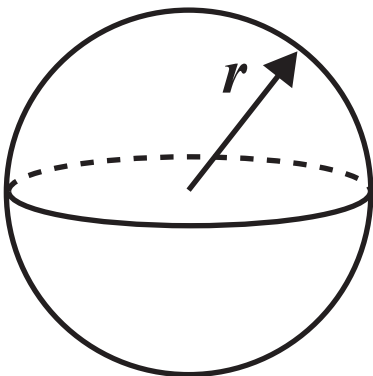
Formula Sheet

Volume of prism = area of cross section \times length



Volume of sphere = $\frac{4}{3} \pi r^3$

Surface area of sphere = $4 \pi r^2$



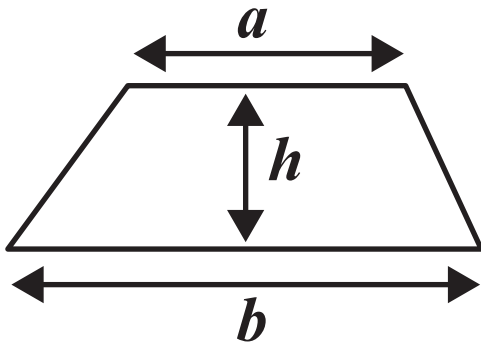
Quadratic Equation

The solutions of $ax^2 + bx + c = 0$

where $a \neq 0$, are given by

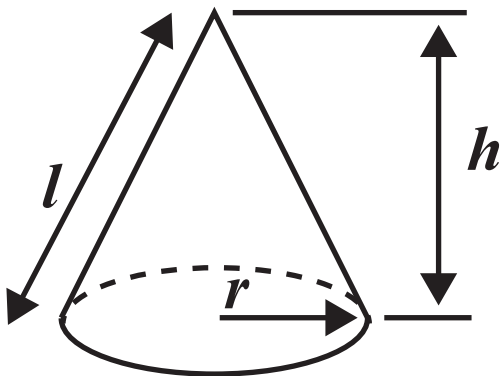
$$x = \frac{-b \pm \sqrt{b^2 - 4ac}}{2a}$$

Area of trapezium = $\frac{1}{2} (a + b)h$

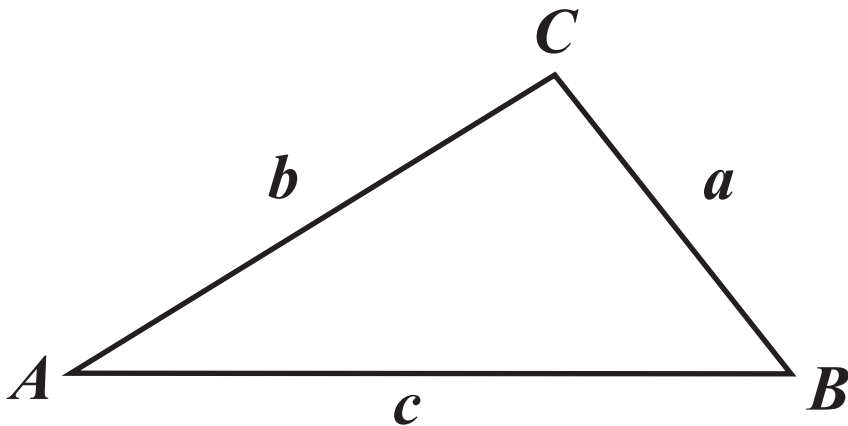


Volume of cone = $\frac{1}{3} \pi r^2 h$

Curved surface area of cone = $\pi r l$



In any triangle ABC



Sine Rule: $\frac{a}{\sin A} = \frac{b}{\sin B} = \frac{c}{\sin C}$

Cosine Rule: $a^2 = b^2 + c^2 - 2bc \cos A$

Area of triangle $= \frac{1}{2} ab \sin C$

Blank Page

- 1 6% of pupils at Marley Middle School are 6 feet tall or taller.

There are 700 pupils at the school.

How many pupils are **under** 6 feet tall?
[3 marks]

Answer _____

2 Jim wants to buy 2 adult tickets and 3 child tickets for a show.

An adult ticket costs **£29.90**

A child ticket costs **£14.95**

Jim has **£100** to spend.

Use an **estimation method** to decide if Jim has enough money. [2 marks]

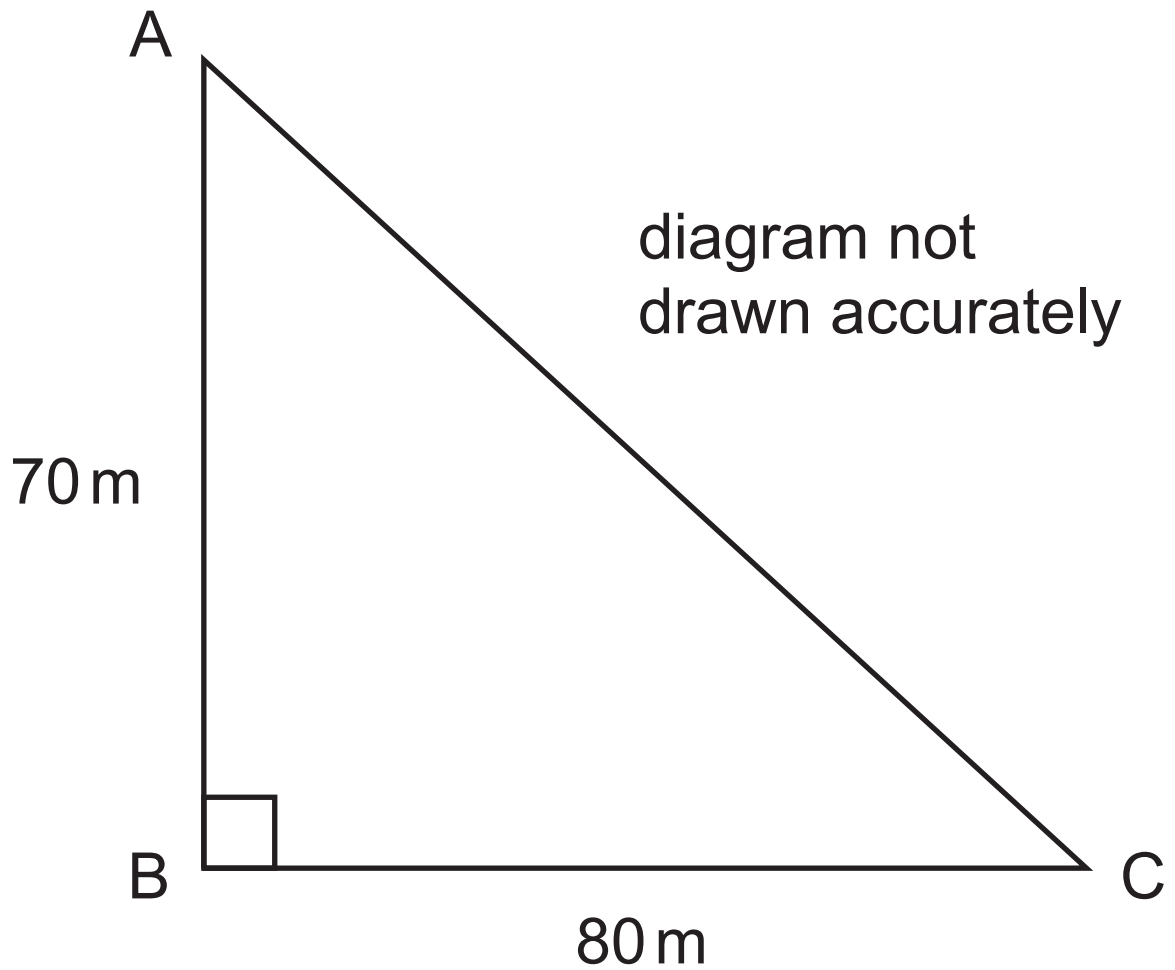
Show all your working.

Does Jim have enough money?

Answer _____

- 3** Draw a scale drawing to work out the actual length of the side AC of the triangle.
[3 marks]

Use the scale $1 \text{ cm} = 10 \text{ m}$



Answer _____ m

4 A fair spinner has three equal sections labelled A, B and 4

It is spun twice.

(a) Complete the table to show all the possible outcomes. [2 marks]

	A	B	4
A	(A, A)		
B			
4			

(b) What is the probability of getting (4, 4)?
[1 mark]

Answer _____

5 (a) Jeff earns £72 for 4 hours of tutoring.

How much does he earn for 10 hours of tutoring? [2 marks]

Answer £ _____

(b) A shop uses the following ingredients to make an ice cream sundae.

Ice cream	3 scoops
Sprinkles	4 spoonfuls
Whipped cream	2 tablespoons

How many scoops of ice cream were used on a day when they used 24 spoonfuls of sprinkles to make sundaes?
[2 marks]

Answer _____

Blank Page

(Questions continue overleaf)

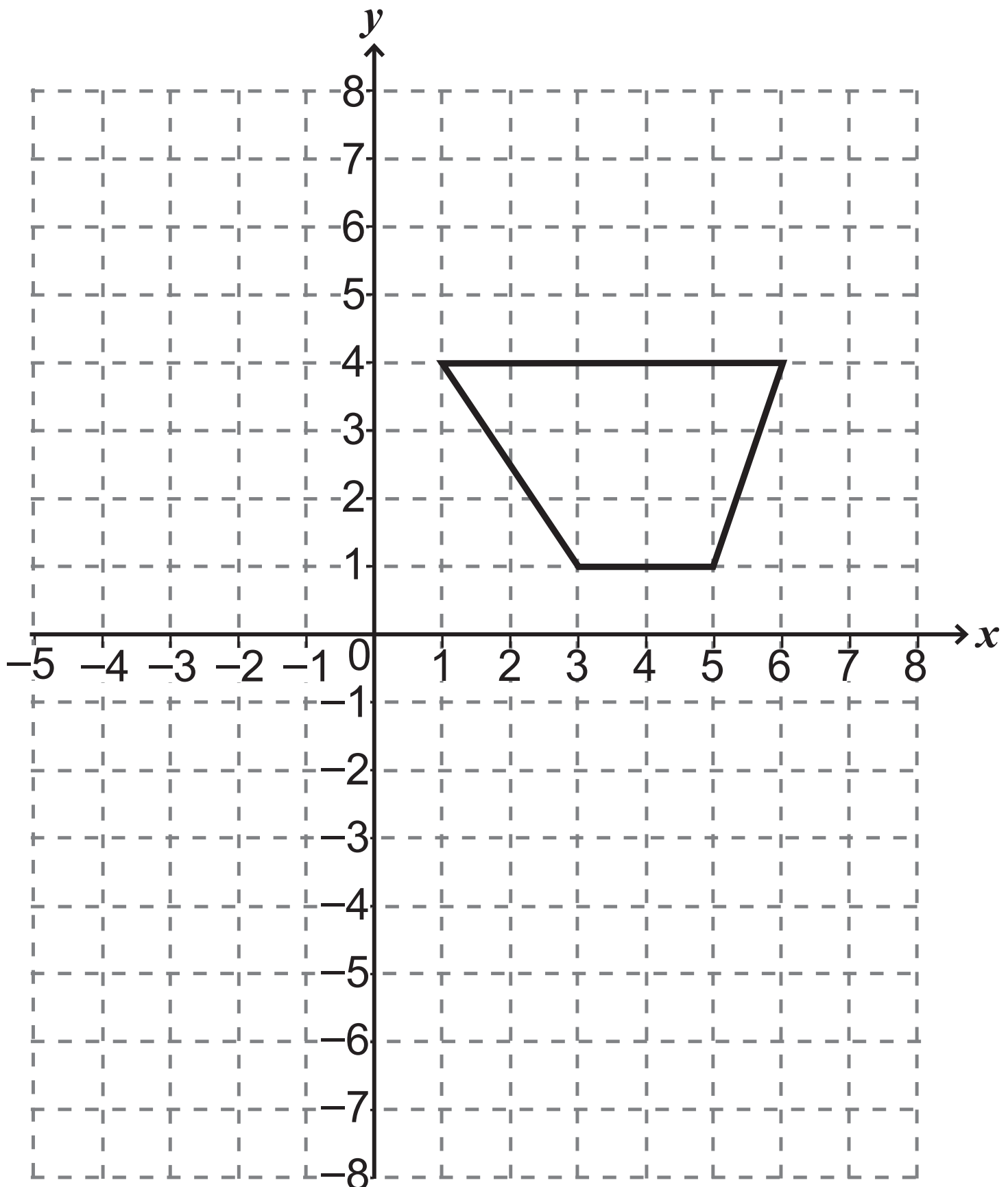
- 6 A café owner works out the probability of customers buying a drink with their meal.

Drink	Water	Milk	Hot drink	Other	None
Probability	0.24		0.3	0.15	0.12

What is the probability that a customer, chosen at random, buys milk? [2 marks]

Answer _____

7 Translate the shape 2 to the right and 4 down. [2 marks]



8 In a box there are bronze, silver and gold medals.

There are 21 bronze and 42 silver medals.

A medal is taken at random from the box.

The probability of taking a gold medal is $\frac{3}{10}$

How many **gold** medals are there?
[3 marks]

Answer _____

9 John spends x hours each week on homework.

Joanne spends 3 hours more than John each week on homework.

In total they spend more time on homework each week than Sam, who spends 14 hours per week on homework.

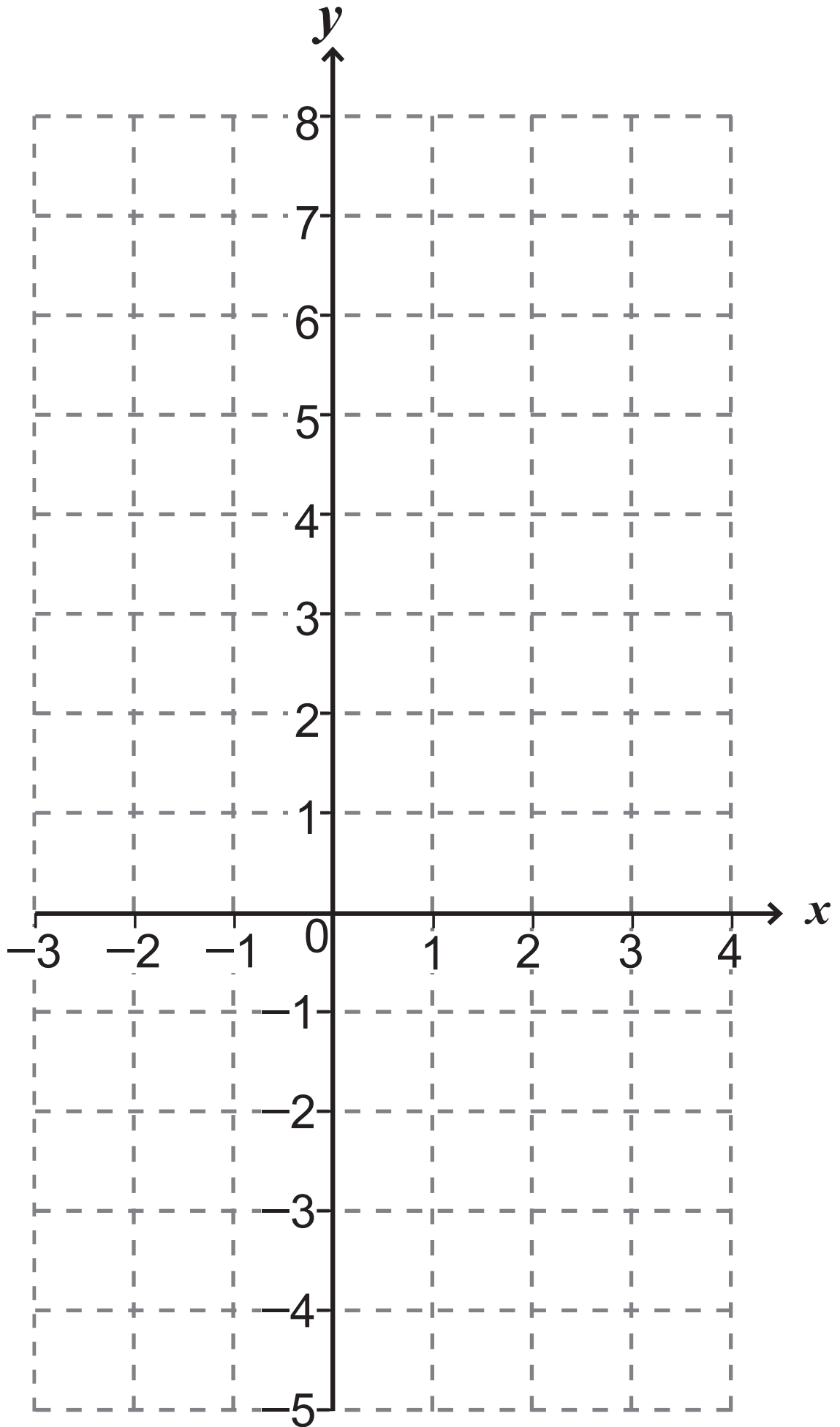
Write down an inequality and solve it for x .
[3 marks]

Answer _____

10 (a) (i) Complete the table for $y = x^2 - x - 4$
[2 marks]

x	-3	-2	-1	0	1	2	3	4
y	8			-4	-4	-2	2	8

(ii) Hence draw the graph of
 $y = x^2 - x - 4$ on the grid opposite.
[2 marks]



(b) Use the graph to solve the equation
 $x^2 - x - 4 = 0$ [1 mark]

Answer _____

(c) (i) Draw the line $y = 2x - 3$ on the grid. [1 mark]

(ii) Use your graph to find the points of intersection of $y = x^2 - x - 4$

and $y = 2x - 3$ [2 marks]

Answer (_____ , _____) , (_____ , _____)

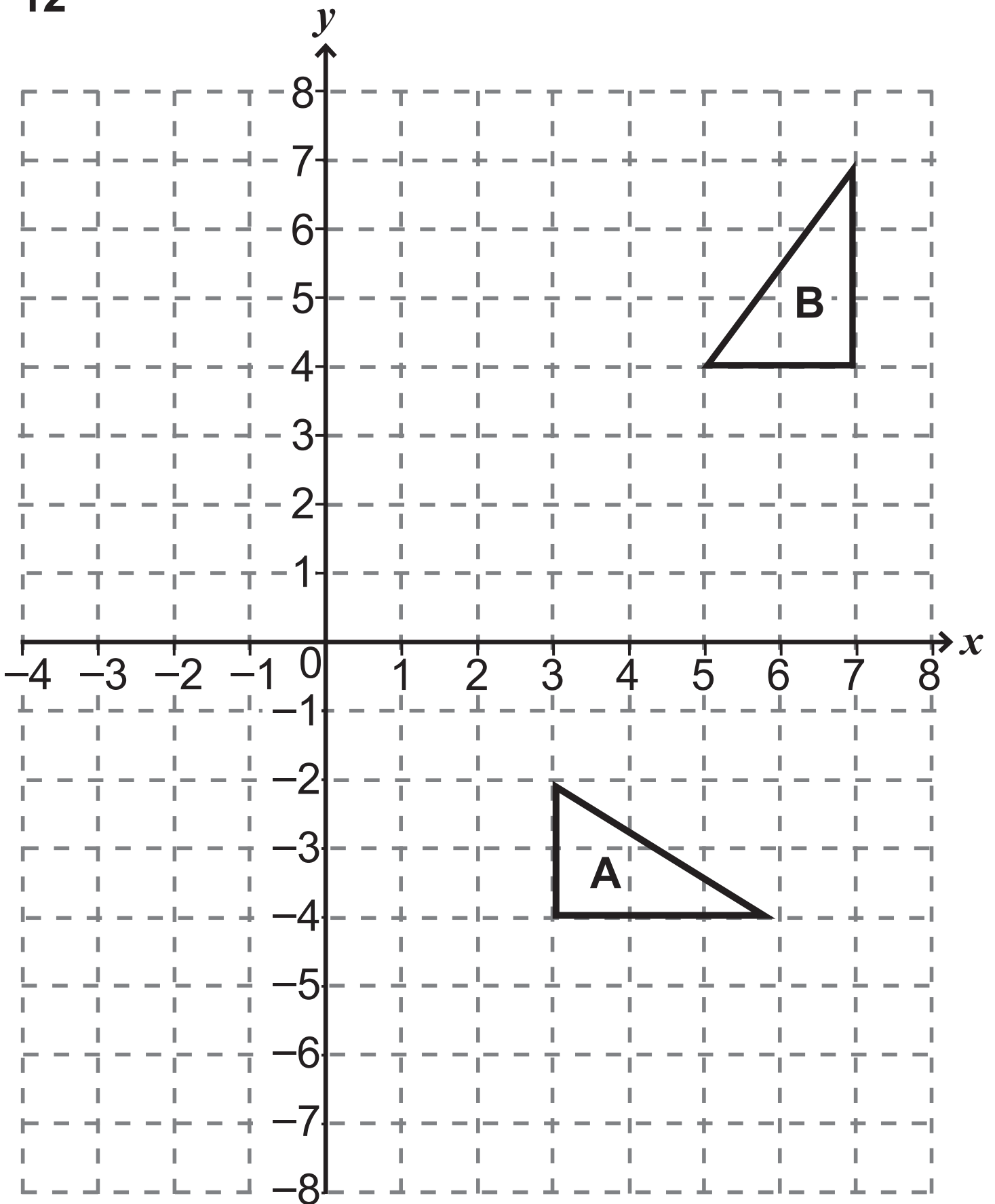
11 Each interior angle of a regular polygon is 140°

How many sides does it have? [2 marks]

Answer _____

Blank Page

(Questions continue overleaf)



Describe fully the **single** transformation which takes triangle **A** to triangle **B**.
[3 marks]

Answer _____

13 A jeweller sells watch batteries at a fixed price and watch straps at a different fixed price.

On Monday he sold 1 battery and 3 straps for £40

On Tuesday he sold 2 batteries and 1 strap for £25

Calculate the price of a battery and the price of a strap. [4 marks]

A solution by trial and error will not be accepted.

Answer Price of one battery £ _____

Price of one strap £ _____

14 A lunch deal consists of a sandwich, a drink and a piece of fruit.

On Friday there are 5 choices of sandwich, 6 choices of drink and 4 choices of fruit.

On Saturday there are 6 choices of sandwich, 8 choices of drink and 3 choices of fruit.

How many more combinations are available on Saturday than on Friday? [3 marks]

Answer _____

15 Which is heavier, **A** or **B**? [2 marks]

Show your working.

A $1.05 \times 10^7 \text{ g}$
--

B $1.5 \times 10^4 \text{ kg}$
--

Answer _____

16 A and B are similar shapes.

The area of A is 24 cm^2

The area of B is 96 cm^2

The height of B is 15 cm.

What is the height of A? [3 marks]

Answer _____ cm

**This is the end of the
question paper**

SOURCES

All images © CCEA unless stated

For Examiner's use only	
Question Number	Marks
1	
2	
3	
4	
5	
6	
7	
8	
9	
10	
11	
12	
13	
14	
12	
16	
Total Marks	

Examiner Number

Permission to reproduce all copyright material has been applied for.
In some cases, efforts to contact copyright holders may have been unsuccessful and CCEA will be happy to rectify any omissions of acknowledgement in future if notified.