



Rewarding Learning

General Certificate of Secondary Education
2024

Centre Number

--	--	--	--	--

Candidate Number

--	--	--	--

Mathematics

Unit M6 Paper 2
(With Calculator)

Foundation Tier



MV18

[GMC62]

MONDAY 3 JUNE, 10.45 am–11.45 am

Time

1 hour, plus your additional time allowance.

Instructions to Candidates

Write your Centre Number and Candidate Number in the spaces provided at the top of this page.

**You must answer the questions in the spaces provided.
Do not write on blank pages or tracing paper.**

Complete in black ink only.

Answer **all sixteen** questions.

All working should be clearly shown in the spaces provided.

Marks may be awarded for partially correct solutions.

You **may** use a calculator for this paper.

Information for Candidates

The total mark for this paper is 50.

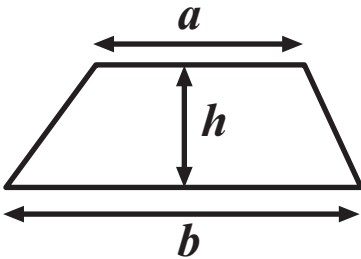
Figures in brackets printed at the end of each question indicate the marks awarded to each question or part question.

You should have a calculator, ruler, compasses and a protractor.

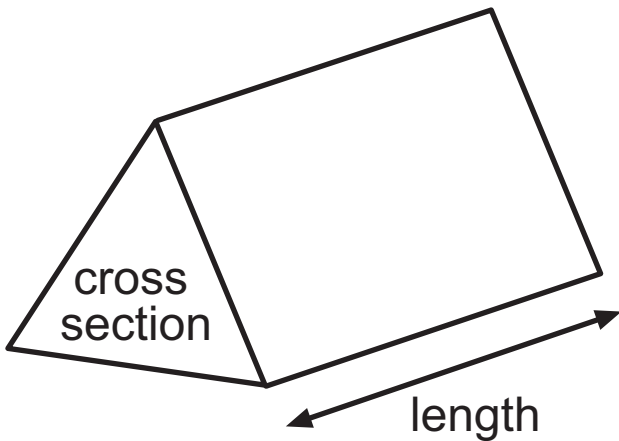
The Formula Sheet is on page 2.

Formula Sheet

$$\text{Area of trapezium} = \frac{1}{2} (a + b)h$$



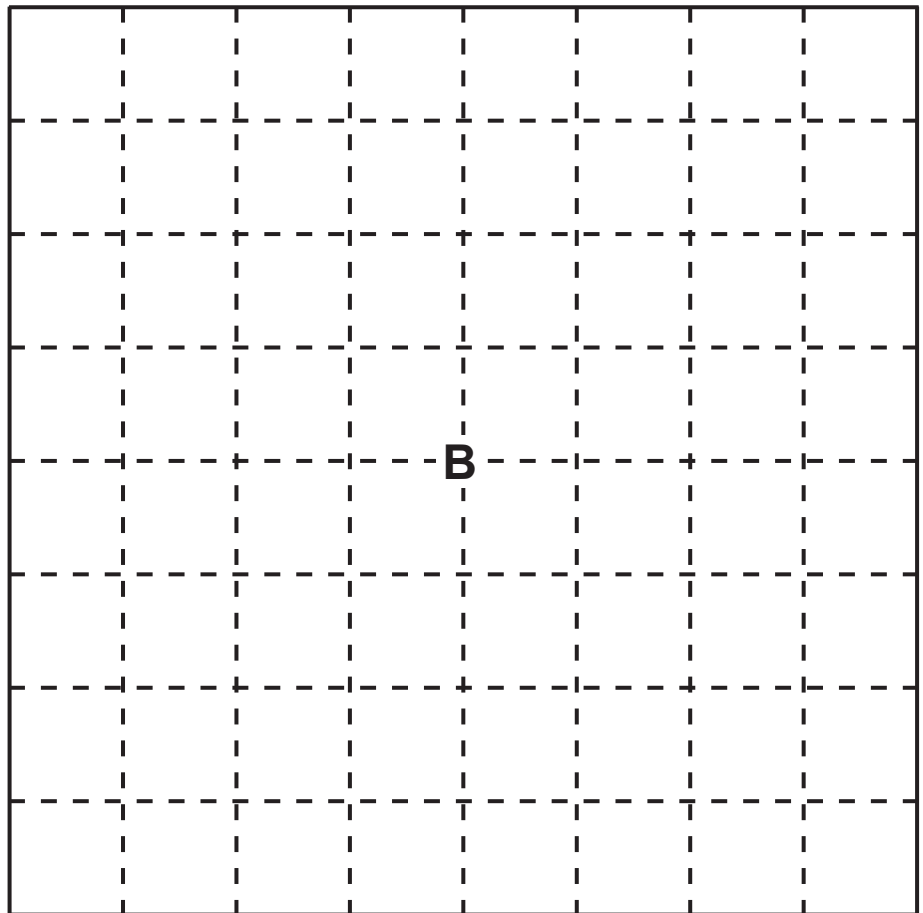
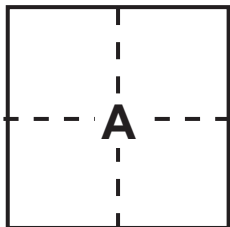
$$\text{Volume of prism} = \text{area of cross section} \times \text{length}$$



1 (a) Square **A** has been enlarged to Square **B**.

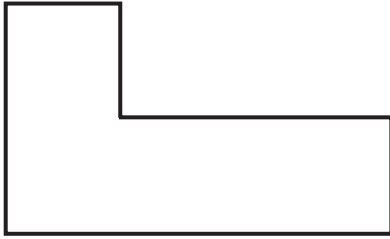
What is the scale factor of the enlargement?

[1 mark]




Answer _____

(b) Sammy enlarges the shape below.



This is Sammy's enlargement.



Which statement is correct? [1 mark]

- A** Sammy's enlargement is correct.
- B** We can't tell if Sammy's enlargement is correct as we don't know the scale factor used.
- C** Sammy's enlargement is incorrect.

Answer _____

2 Morgan wants to have a heavy package delivered 28 miles.

She has two options.

Deliver it there

£35 for up to 20 miles, and £2.50 per extra mile

Ready to go local

£42.50, plus £9.50 for distances between 25 miles and 40 miles

Which is the cheaper option and by how much? [4 marks]

Answer _____

is cheaper by _____

3 (a)

°C	-5	5	15	25	35
°F	23	41	59	77	95

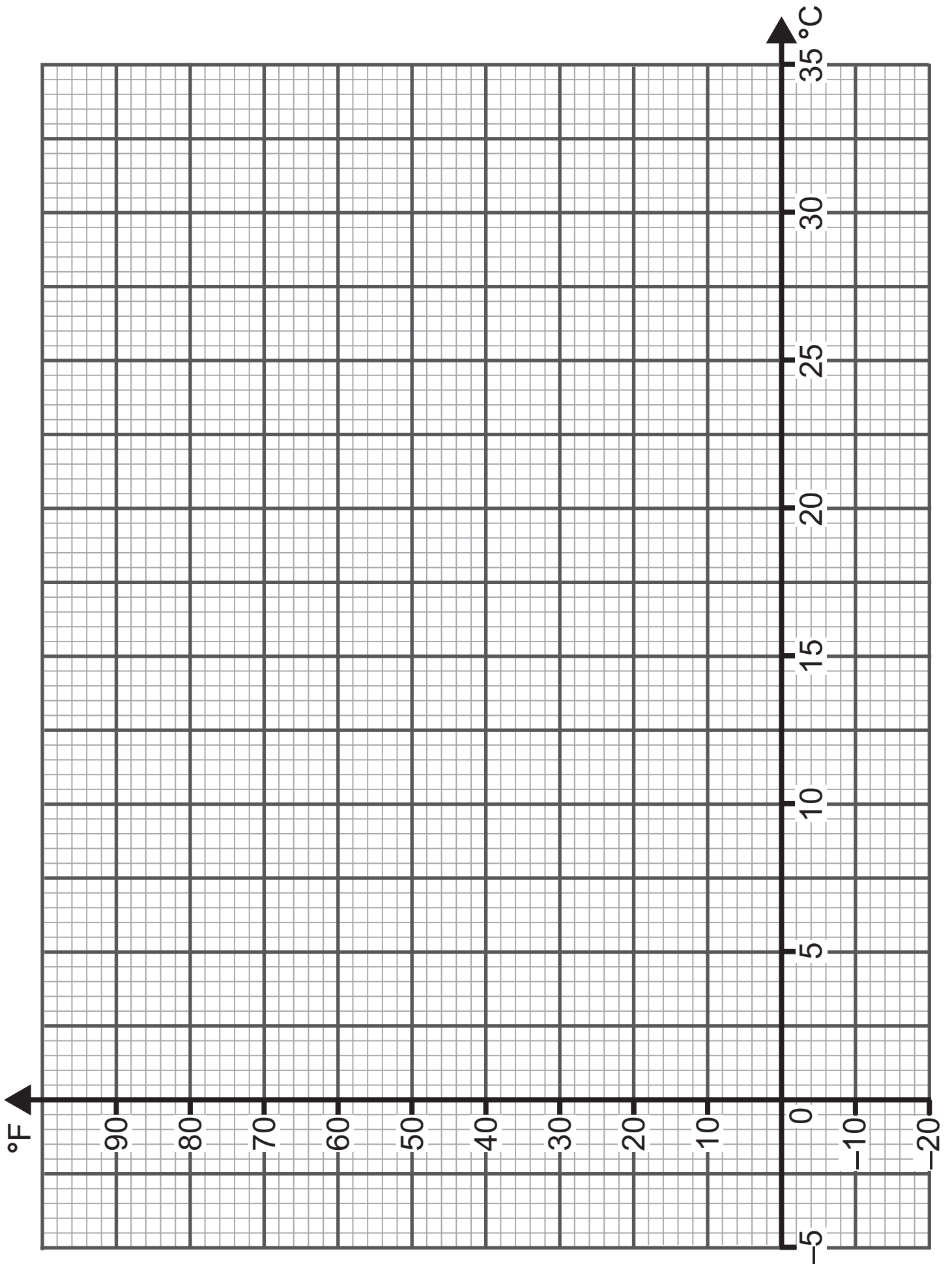
Use the table to draw the conversion graph from °C (centigrade) to °F (Fahrenheit) on the grid opposite. [3 marks]

(b) Use your graph to convert 22°C to °F. [1 mark]

Answer _____ °F

(c) Use your graph to convert 27°F to °C. [1 mark]

Answer _____ °C

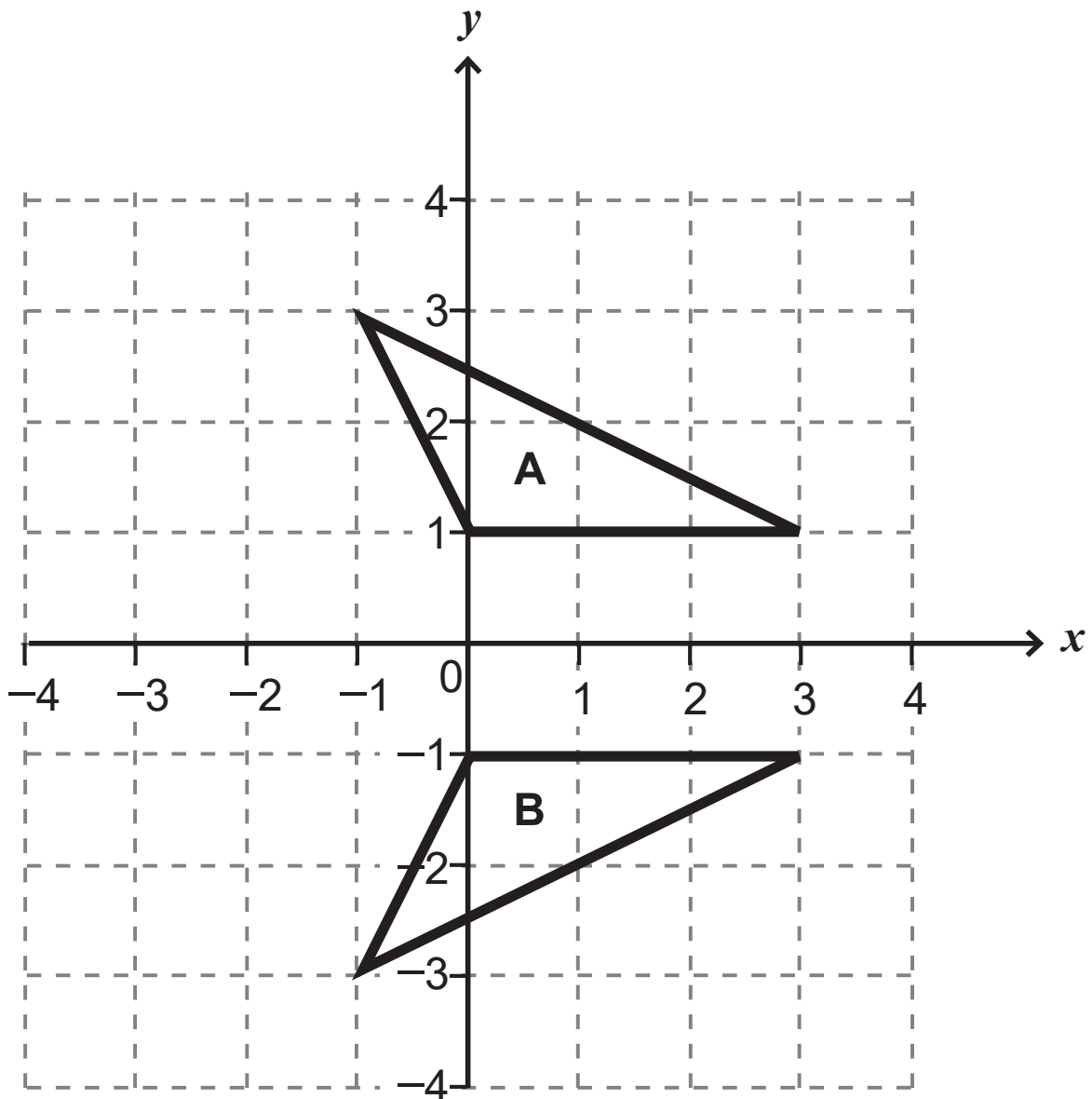


- 4 Each new number in a sequence is found using the rule
divide by 3 and then subtract 5

Find the next two numbers in this sequence. [2 marks]

24, _____ , _____

- 5 Describe fully the **single** transformation that takes triangle **A** to triangle **B**. [2 marks]



Answer _____

6



Pete is filling 5-litre petrol cans from a large tank of petrol.

The tank contains 16 gallons.

Pete knows that 1 gallon = 4.5 litres.

How many 5-litre cans does he need to empty the tank?
[2 marks]

Answer _____ cans

7 Jack ran 4 km each day during the month of June.

He thinks he has run the length of 3 marathons.

A marathon is 26.2 miles long.

Is he right?

Explain your answer. [4 marks]

Answer _____ because _____

- 8 The heights (in cm) of students in a Year 1 class are recorded in the table below.

	$90 \leq h < 95$	$95 \leq h < 100$	$100 \leq h < 110$
Girl	6	5	2
Boy	4	7	6

A student is taken at random from the class.

(a) What is the probability of taking [1 mark for each]

(i) a girl with height $100 \leq h < 110$,

Answer _____

(ii) a boy,

Answer _____

(iii) a student with height $90 \leq h < 95$,

Answer _____

(iv) a girl with height $90 \leq h < 100$?

Answer _____

(b) An event is held for Year 1 students.

600 Year 1 students attend.

Estimate how many of the students have height
 $100 \leq h < 110$ [2 marks]

Answer _____

- 9 The number of oysters collected by divers for a number of dives is recorded.

Name	Number of dives	Number of oysters collected
Diving Dan	16	84
Scuba Sam	11	33
Clammy Colin	24	102

Which diver is the best at collecting oysters? [2 marks]

Show your working clearly.

Answer _____

because _____

10 Work out the value of x in the pentagon below. [4 marks]

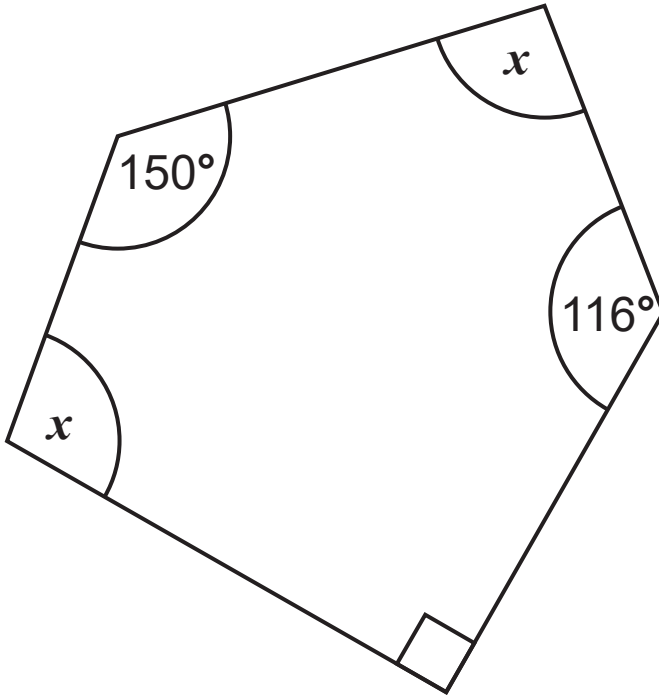


diagram not
drawn
accurately

Answer $x =$ _____ $^\circ$

11 In a local election the following figures were recorded at three polling stations.

Station	Number who voted	Number registered to vote
A	645	1270
B	860	1548
C	1450	3015

Of the total number of those registered to vote, what percentage voted? [3 marks]

Answer _____ %

12 Tammy makes cordial using fruit juice and sparkling water in the ratio 1:3

Tammy has 800 ml of fruit juice and 2100 ml of sparkling water.

What is the greatest amount of cordial she can make?
[3 marks]

Answer _____ ml

13 Sarah rolls a fair dice and tosses a fair coin.

What is the probability that she gets a number less than 5 and a Head? [2 marks]

Show your working out.

Answer _____

14 $x^a \times x^4 = x^{12}$

Find the value of a . [1 mark]

Answer $a =$ _____

15 The equation $x^3 - 12x - 2 = 0$ has a solution between 2 and 5

Use a trial and improvement method to find this solution, correct to one decimal place. [4 marks]

You must show all your working.

x	$x^3 - 12x - 2$

Answer $x =$ _____

16 There are 200 students in Year 8 and 160 students in Year 9

There are 120 girls in Year 8 and 100 girls in Year 9

The probability that a girl plays a musical instrument is 0.3

The probability that a boy plays a musical instrument is 0.25

A student is taken at random from the students who play a musical instrument.

What is the probability that it is a boy? [4 marks]

Answer _____

This is the end of the question paper

SOURCES

All sources © CCEA unless stated

Q6 Source: © Getty Images

For Examiner's use only	
Question Number	Marks
1	
2	
3	
4	
5	
6	
7	
8	
9	
10	
11	
12	
13	
14	
15	
16	
Total Marks	

Examiner Number

Permission to reproduce all copyright material has been applied for. In some cases, efforts to contact copyright holders may have been unsuccessful and CCEA will be happy to rectify any omissions of acknowledgement in future if notified.