



General Certificate of Secondary Education
November 2021

Centre Number

--	--	--	--	--

Candidate Number

--	--	--	--	--

Mathematics

Unit M5 Paper 2
(With calculator)
Foundation Tier



[GMC52]

GMC52

THURSDAY 2 DECEMBER, 10.45am–11.45am

TIME

1 hour.

INSTRUCTIONS TO CANDIDATES

Write your Centre Number and Candidate Number in the spaces provided at the top of this page. **You are provided with Foundation Tier Additional Support Materials for use with this paper.**

You must answer the questions in the spaces provided.

Do not write outside the boxed area on each page, on blank pages or tracing paper.

Complete in black ink only. **Do not write with a gel pen.**

Answer **all sixteen** questions.

All working should be clearly shown in the spaces provided. Marks may be awarded for partially correct solutions.

You **may** use a calculator for this paper.

INFORMATION FOR CANDIDATES

The total mark for this paper is 50.

Figures in brackets printed down the right-hand side of pages indicate the marks awarded to each question or part question.

You should have a calculator, ruler, compasses and a protractor.

The Formula Sheet is on page 2.

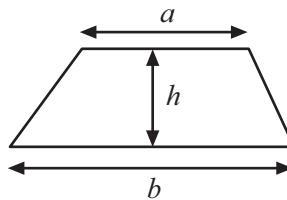
12922



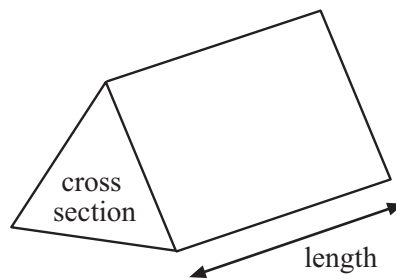
20GMC5201

Formula Sheet


$$\text{Area of trapezium} = \frac{1}{2}(a + b)h$$



$$\text{Volume of prism} = \text{area of cross section} \times \text{length}$$




1 (a) What reading is shown?



Answer _____ [1]

(b) What height is this man?

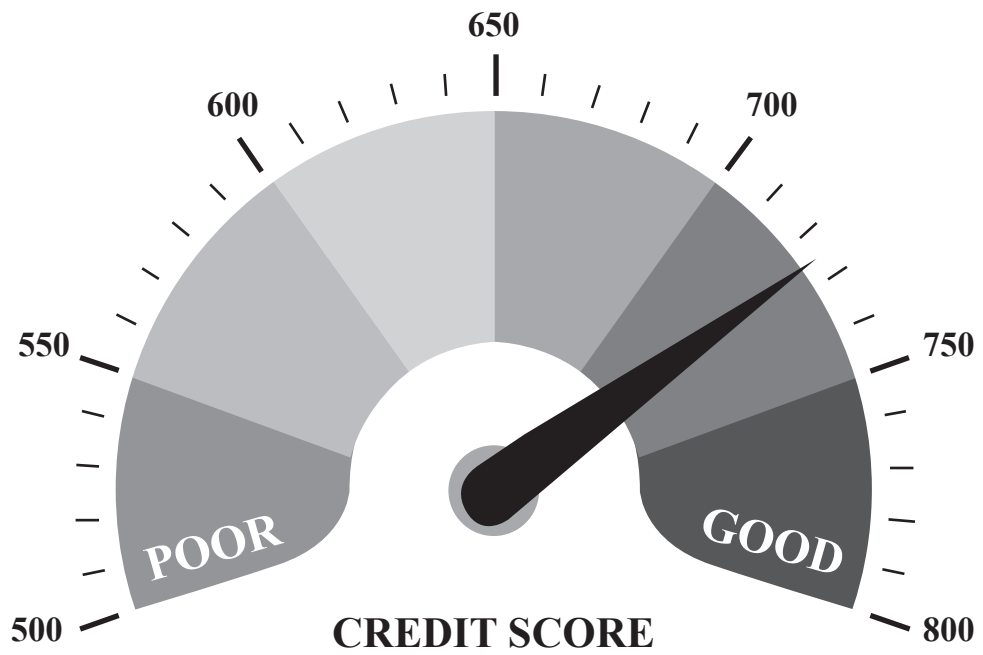


Answer _____ cm [1]

[Turn over]



(c) What credit score is shown?



Answer _____ [1]



2 Circle whether the following statements are true or false.

(a) Tomorrow it will either rain or not rain.

So the probability of rain tomorrow is evens.

True

False

[1]


(b) The probability of rolling a five on a fair dice is likely.

True

False

[1]

(c) The probability of picking an apple at random from the fruit below is unlikely.



True

False

[1]

[Turn over



- 3 (a) The number 38.7 can be written as

$$30 + 8 + \frac{7}{10}$$

Write the number 52.3 in this way.

Answer _____ [1]

- (b) Increase the number 21.48 by $\frac{1}{10}$

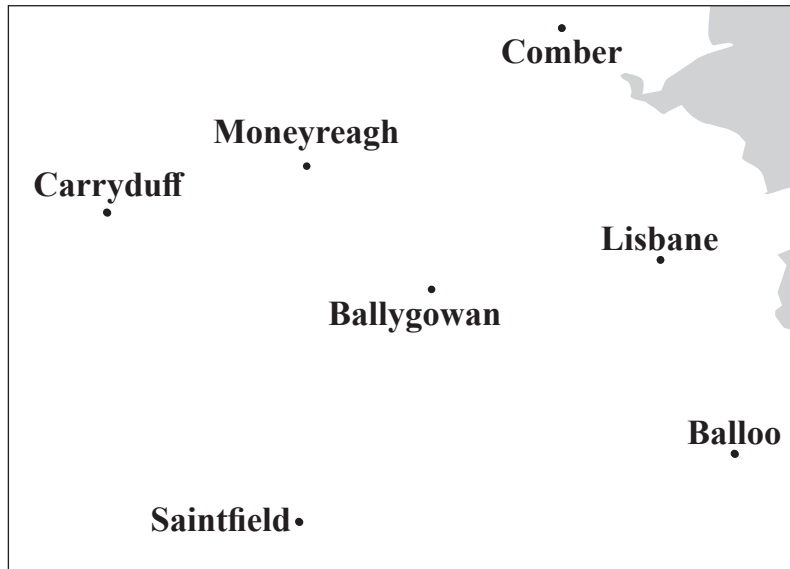
Answer _____ [1]

- (c) Decrease the number 3.60 by $\frac{1}{100}$

Answer _____ [1]



4 The map shows some places in Co Down.



Scale: 1 cm represents 1 mile

(a) What is the compass direction of Moneyreagh from Saintfield?

Answer _____ [1]

(b) Which place is northwest of Ballygowan?

Answer _____ [1]

(c) A bird flies direct from Carryduff to Balloo.

What is the actual distance the bird flies?

Answer _____ [2]

[Turn over



5 (a) Gordon has 185 grams of flour.

He needs half a pound of flour for a recipe.

There are 454 grams in one pound.

How much **more** flour does he need?

Answer _____ g [2]

(b) Glenarm is 20 miles from Carrickfergus.

How many kilometres is this?

Answer _____ km [2]



6 (a) Write down the next term in this sequence:

4, 9, 14, 19, _____

[1]

(b) Cathy continues this sequence for a few more terms and spots a pattern.

She uses the pattern to predict correctly what the **last digit** is in the 30th term.

What is the last digit?

Answer _____ [1]



7 Some children are in a playground.

They are aged 10, 8, 11, 8, 9, 8 and 8 years old.

One of the children is chosen at random.

(a) What is the probability that the child is 8 years old?

Answer _____ [1]

(b) What is the probability that the child is 7 years old?

Answer _____ [1]

(c) What is the probability that the child is not 11 years old?

Answer _____ [1]



8 (a) The probability that Matt eats breakfast is marked on the scale with a B.

What is the probability?



Answer _____ [1]

(b) Matt has a three-digit combination lock for his bike.



He has forgotten the code.

He knows the first digit is 2

The second digit is either 3 or 4

The third digit is 5, 6 or 7

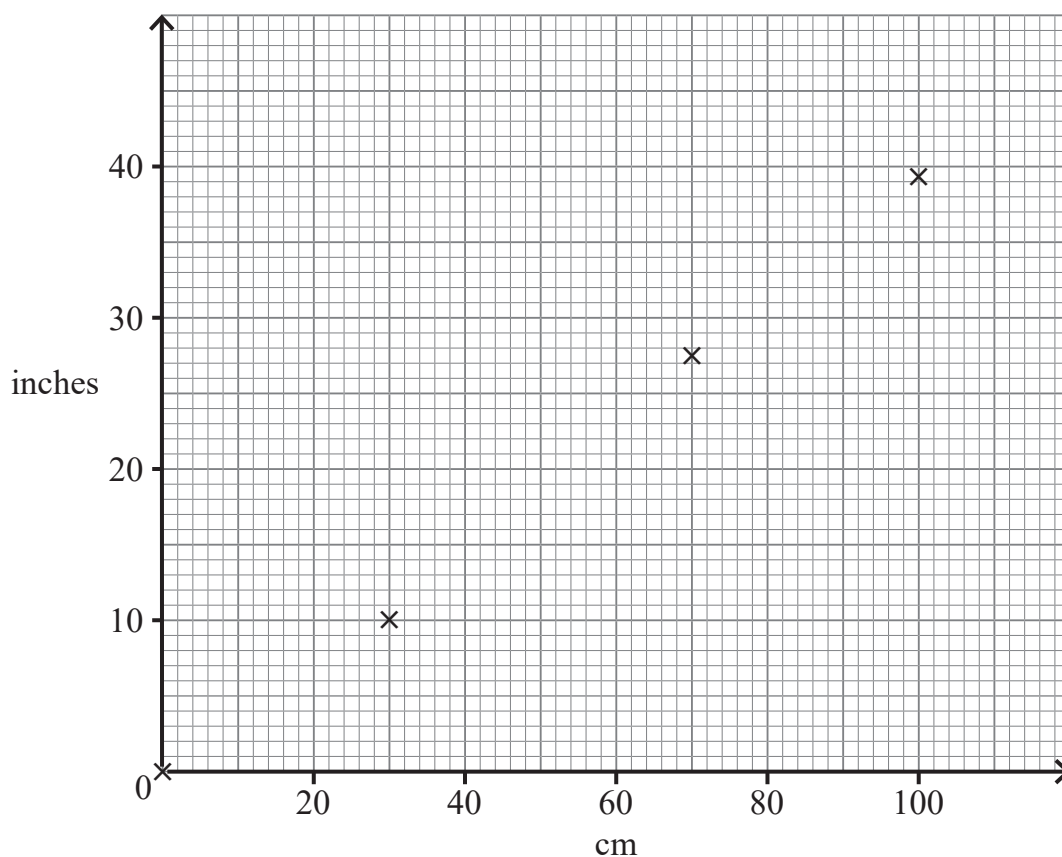
List all the possible combinations of Matt's code.

[2]

[Turn over



9 Pat plotted four points to make a conversion graph from centimetres to inches.



(a) One point is wrong. Circle the wrong point.

[1]

(b) Draw the conversion graph.

[1]

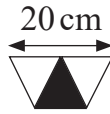
(c) Use the graph to convert 88 cm to inches.

Answer _____ inches [1]

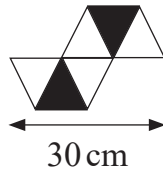


10 A trapezium is divided into 3 equilateral triangles, 1 black and 2 white.

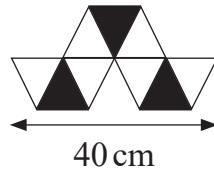
The trapezium has a side length of 20 cm as shown.



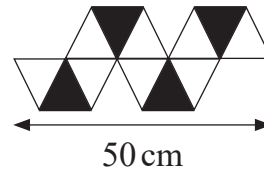
The trapeziums are lined up to make chain patterns.



Pattern 1



Pattern 2



Pattern 3

(a) Complete the table for the missing length for 10 trapeziums.

Number of trapeziums	1	2	3	4	10
Length of chain (cm)	20	30	40	50	

[2]

(b) Complete the table for the missing number of **white triangles** when the pattern number is 10

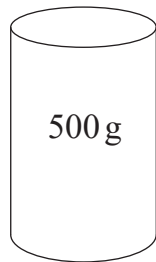
Pattern number	1	2	3	10
Number of white triangles	4	6	8	

[1]

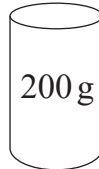
[Turn over



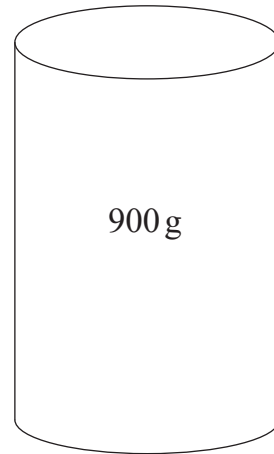
11



£3.50



£1.50



£6.50

Raisins are sold in three different sizes of tubs.

Which is the best value for money?

You must show your working.

Answer _____ [4]



12 Bob changed £35 into euro.

Bev changed £42 into euro.

The exchange rate was £1 = 1.06 euro.

How many more euro did Bev get than Bob?

Answer _____ euro [3]



13 (a) A roll of wallpaper has a width of 53 cm, measured to the nearest centimetre.

What is the maximum width of this roll of wallpaper?

Answer _____ cm [1]

(b) A television has a screen width of 88.6 cm, measured to one decimal place.

What is the minimum screen width of this television?

Answer _____ cm [1]



14 One Saturday, 460 people visited the museum.

180 were children of which $\frac{3}{5}$ were girls.

280 were adults and the ratio of men to women was 4:3

Paul says that, altogether, more males than females visited the museum that Saturday.

Is he correct?

Show all your working.

Answer _____ [4]

[Turn over



15

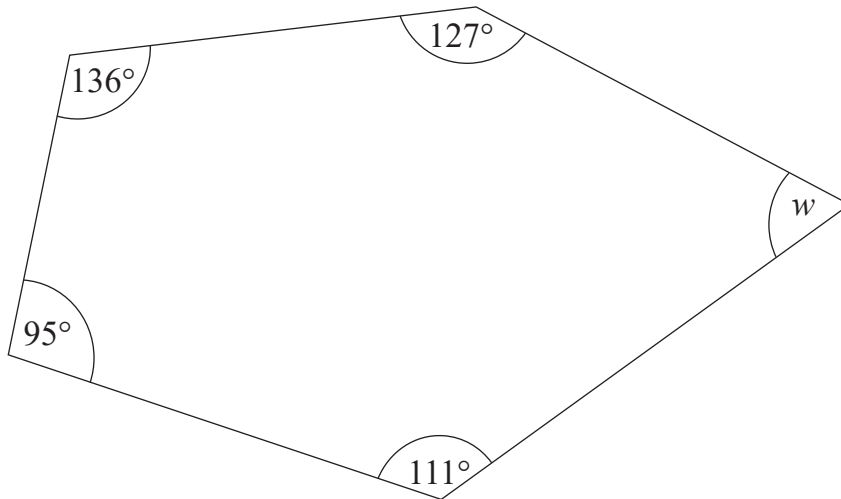


diagram
not
drawn
accurately

Work out the size of the angle w in the pentagon drawn above.

Answer $w =$ _____ $^\circ$ [3]



16 A company makes memory chips.

The probability that one of these memory chips is faulty is 0.025

The company makes 1800 memory chips each hour.

Work out an estimate for the number of memory chips made per hour that will **not** be faulty.

Answer _____ [3]

THIS IS THE END OF THE QUESTION PAPER



Sources: All images © CCEA

DO NOT WRITE ON THIS PAGE

For Examiner's use only	
Question Number	Marks
1	
2	
3	
4	
5	
6	
7	
8	
9	
10	
11	
12	
13	
14	
15	
16	

Total Marks	
--------------------	--

Examiner Number

Permission to reproduce all copyright material has been applied for.
In some cases, efforts to contact copyright holders may have been unsuccessful and CCEA will be happy to rectify any omissions of acknowledgement in future if notified.

12922/5



20GMC5220